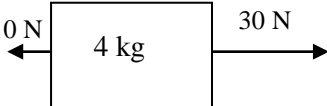
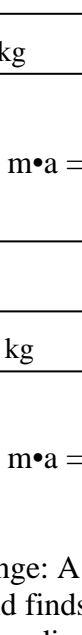
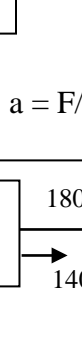
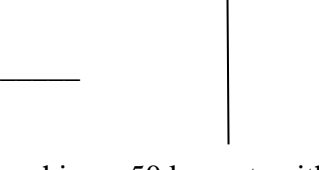



*For each of the following problems, give the net force on the block, and the acceleration, including units.*

1)    
 Net Force = \_\_\_\_\_ a = F/m = \_\_\_\_\_


2)    
 Net Force = \_\_\_\_\_ a = F/m = \_\_\_\_\_

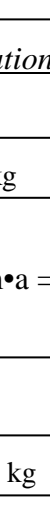
3)    
 Net Force = \_\_\_\_\_ a = \_\_\_\_\_

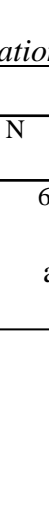
4)    
 Net Force = \_\_\_\_\_   
 a = \_\_\_\_\_


5)    
 Net Force = \_\_\_\_\_ a = \_\_\_\_\_

*For problems 6-9, using the formula net Force = Mass • Acceleration, calculate the net force on the object.*

6)    
 F = m•a = \_\_\_\_\_

7)    
 F = m•a = \_\_\_\_\_

8)    
 F = m•a = \_\_\_\_\_

9)    
 F = m•a = \_\_\_\_\_

10) Challenge: A student is pushing a 50 kg cart, with a force of 600 N. Another student measures the speed of the cart, and finds that the cart is only accelerating at 3 m/s<sup>2</sup>. How much friction must be acting on the cart? Hint: Draw a diagram showing the cart, and the two forces acting on it.

**Equations:  $F=ma$      $a=F/m$      $m=F/a$**

Plug in the given values for Force/Mass/Acceleration to solve.

Remember, **mass is in kg** - - **force in in N** (newtons) - - **acceleration is in  $m/s^2$**

1. How much force is needed to accelerate a 66 kg skier at  $2 m/sec^2$ ?
2. What is the force on a 1000 kg elevator that is falling freely at  $9.8 m/sec^2$ ?
3. What is the acceleration of a 50 kg object pushed with a force of 500 newtons?
4. The mass of a large car is 1000 kg. How much force would be required to accelerate the car at a rate of  $3 m/sec^2$ ?
5. A 50 kg skater pushed by a friend accelerates  $5 m/sec^2$ . How much force did the friend apply?
6. A force of 250 N is applied to an object that accelerates at a rate of  $5 m/sec^2$ . What is the mass of the object?
7. A bowling ball rolled with a force of 15 N accelerates at a rate of  $3 m/sec^2$ ; a second ball rolled with the same force accelerates  $4 m/sec^2$ . What are the masses of the two balls?
8. If a 60 kg person on a 15 kg sled is pushed with a force of 300 N, what will be person's acceleration?
9. A force of 20 N acts upon a 5 kg block. Calculate the acceleration of the object.
10. An object of mass 300 kg is observed to accelerate at the rate of  $4 m/s^2$ . Calculate the force required to produce this acceleration.
11. A 5 kg block is pulled across a table by a horizontal force of 40 N with a frictional force of 8 N opposing the motion. Calculate the acceleration of the object.
12. An object of mass 30 kg is in free fall in a vacuum where there is no air resistance. Determine the acceleration of the object.
13. An object of mass 30 kg is falling in air and experiences a force due to air resistance of 50 newtons.
  - a. Determine the net force acting on the object and
  - b. calculate the acceleration of the object.